

ID Number: \_\_\_\_\_ Date: \_\_\_\_\_




Choose the correct option.






During correction in plenary put a cross on P(Positive) if you chose the correct option or cross on N(Negative) if you chose the wrong option.





Total Correct answers: \_\_\_\_/14 (Sufficient = correct answers n. 9)

The test is passed  YES  NO

Signature of the Teacher \_\_\_\_\_ Signature of the Coordinator \_\_\_\_\_

N°	Question	Answer	Outcome Positive = P Negative = N
1	 <p>What does this symbol mean?</p>	a) Pay attention to vehicles moving around the construction site; b) No access for unauthorized persons; c) Access authorized for identification badge owners, d) Stop! Identification required; e) Give way to operating machines;	◇ P  ◇ N
2	 <p>What do the colours mean?</p>	a) There isn't a difference between colours; b) Blue voltage 380 V and Red voltage 220 V; c) Blue is for domestic use and Red is for the construction site; d) Red voltage 380 V and Blue voltage 220 V; e) Red voltage 380 V and Blue voltage 24 V; f) It depends, if they are used in the construction site	◇ P  ◇ N
3	 <p>What does this symbol mean?</p>	a) It is mandatory to wear headphones; b) It is mandatory to wear ear plugs; c) Hearing protection is suggested; d) Noise hazard above 80 Decibels; e) Hearing protection is required;	◇ P  ◇ N

N° Dom.	Question	Answer	Outcome Positive = P Negative = N
4	 <p>What is the safe working distance?</p>	<p>a) The minimum working distance from an electric voltage is always 5 m;                      b) The minimum working distance is 5 m if the crane uses the forks;                      c) The minimum working distance depends on the specific situation (type of voltage, weather conditions, type of crane);                      d) Distance isn't important because electrical cables are always isolated;</p>	<p>◇ P ◇ N</p>
5	 <p>What does this symbol mean?</p>	<p>a) Warning! Workers using safety harness belts;                      b) Fall from height risk;                      c) Wear mandatory personal protective equipment to protect against falls from height;                      d) Docking point;                      e) Prohibited to use safety harness belts and scaffolding;</p>	<p>◇ P ◇ N</p>
6	 <p>What does this symbol mean?</p>	<p>a) Emergency Assembly Point in case of an emergency;                      b) Fire risk area;                      c) Electrical equipment must not be used on site;                      d) Class II or double insulated electrical appliance</p>	<p>◇ P ◇ N</p>
7	 <p>What does this symbol mean?</p>	<p>a) Warning! Electric discharges from the crane;                      b) Lightning fall! Dangerous area for workers to move around;                      c) Danger! High voltage;                      d) Connect concrete mixers and cranes;                      e) Make sure the electrical appliance is properly plugged into the power socket;</p>	<p>◇ P ◇ N</p>
8	 <p>What does this symbol mean?</p>	<p>a) Danger of chemical product forbidden to pregnant workers;                      b) Harmful chemical product;                      c) Irritating chemical product but it is not present as a danger on construction site;                      d) Irritating chemical product such as cement;</p>	<p>◇ P ◇ N</p>

N°	Question	Answer	Outcome Positive = P Negative = N
9	 What does this symbol mean?	a) Fire hose; b) Portable or mobile powder extinguisher; c) Portable fire extinguisher; d) Mobile powder extinguisher e) Mobile CO2 fire extinguisher;	◇ P  ◇ N
10	 What does this symbol mean?	a) It indicates the path to follow in the event of a fire on the site; b) It indicates a generic danger in that direction; c) It Indicates the path to follow in the event of an emergency; d) It Indicates a danger of crowding;	◇ P  ◇ N
11	 Where can I find this signage?	a) Near to a fire extinguisher; b) Near to electrical outlets; c) On a cement mixer; d) On an electrical panel;	◇ P  ◇ N
12	 What does this symbol mean?	a) Danger of falling rocks from the crane; b) Lightning fall, dangerous area for workers to move around; c) Warning! suspended loads; d) Forbidden area for pedestrians due to falling objects;	◇ P  ◇ N
13	What does it mean to have a Medical Representative on the construction site?	a) It means that if I need a drug he/she can give me the drug; b) It means that in the event of an accident I must be taken by him/her to the emergency room; c) It means that on the construction site there is health surveillance and I am periodically visited; d) No answer is correct;	◇ P  ◇ N

N° Dom.	Question	Answer	Outcome Positive = P Negative = N
14	Why can't I drink alcohol during work time?	a) Because I become too cheerful; b) Because I fall asleep; c) Because I become nervous; d) Because alcohol reduces attention spans and this can cause injuries;	◇ P ◇ N

### Which Non Technical Skills are important for safety performance?

*Non-technical skills include cognitive, social and personal skills that, together with technical skills, help to work safely*

**What Non Technical Skills for safety performance do you use at work? Explain them talking about situations where you used them.**